

Student Name _____

Tested By B. Peery

Grade 3

Classroom _____

12. _____

14. 18

25

1.09

370

567

15.

14

31

89

209

16. b. _____

14 tens 2 ones

18. 142

Use $<$, $>$, or $=$ to fill in the circle or blank.


20. 42  67

21. $425 > 415$


22. 12 tens and 4 ones _____ 124.

23. Bobby Bear is missing 5 buttons on his jacket. How many ways can you use blue and red buttons to finish his jacket.


Draw a picture here:




24. There was one bird on the tree. Some more came. There are now 4 birds on the tree. How many birds came?



25. Three ducks were at the park. One duck was in the pond and the rest were on the grass. How many ducks were on the grass?



26. A full case of juice boxes has 10 boxes. There are only 6 boxes in this case. How many juice boxes are missing?



27. Jonah is trying to solve this problem:

$$8 + 7 = 15$$

VIII
VII
VI
V

Can you explain what strategy he might use?

28.

$1 + 3 = 4$	$5 - 1 = 4$	$4 - 2 = 2$
$2 + 2 = 4$	$5 - 4 = 1$	$5 + 8 =$
$7 + 9 =$	$20 - 10 =$	$14 - 6 =$
$6 + 7 = 13$	$18 - 9 =$	

29.

$$15 + 44 = \underline{21} \text{ tens } \underline{8} \text{ ones}$$

30.

$$100 - 10 =$$

31. There are 37 students on the playground. A class of 23 more students come, how many children are on the playground now?

32.

$$500 - 346 =$$